





Valentine's Hearts Puzzle

Use the clues to work out the values of each heart.

Set 1



If  +  = 9



and  -  = 3

Then how much is each heart worth?

 _____  _____

Set 2



If  +  = 13



and  -  = 5

Then how much is each heart worth?

 _____  _____

Set 3



If  +  = 17



and  -  = 5

Then how much is each heart worth?

 _____  _____

Set 4



If  +  = 15



and  -  = 9

Then how much is each heart worth?

 _____  _____


Set 5

If  +  = 19

and  -  = 11

Then how much is each heart worth?

 _____  _____




For solutions see page 5.





Valentine's Hearts in Boxes

These 8 Valentine's Hearts have been put into the boxes so that there are 3 hearts in each line of 3 boxes.




Cut out the hearts at the bottom of the page and put them into the boxes according to the instructions.



Arrange 9 hearts in the boxes so that each line of 3 boxes contains 4 hearts.

Arrange 10 hearts in the boxes so that each line of 3 boxes contains 3 hearts.



For solutions see page 5.