



The Elves' Chocolates


Write the multiplication sentence shown in the array. Then on the back of this sheet, draw the array of chocolates you would like for yourself and write the multiplication sentence.




$$__ \times __ = __$$



$$__ \times __ = __$$




$$__ \times __ = __$$




$$__ \times __ = __$$




$$__ \times __ = __$$



$$__ \times __ = __$$



$$__ \times __ = __$$



$$__ \times __ = __$$

