

Name: _____

Date: _____

1. Use the table below to answer this question.

Planet	Diameter (km)
Earth	12,756
Mars	6,787
Saturn	120,660
Neptune	49,560

The table lists the diameters of some planets. Which planet of the four is the SMALLEST?

- A. Earth
 - B. Mars
 - C. Saturn
 - D. Neptune
-

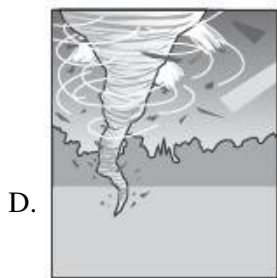
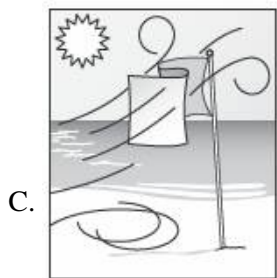


2. Which form of precipitation is frozen rain?

- A. snow
 - B. dew
 - C. frost
 - D. sleet
-

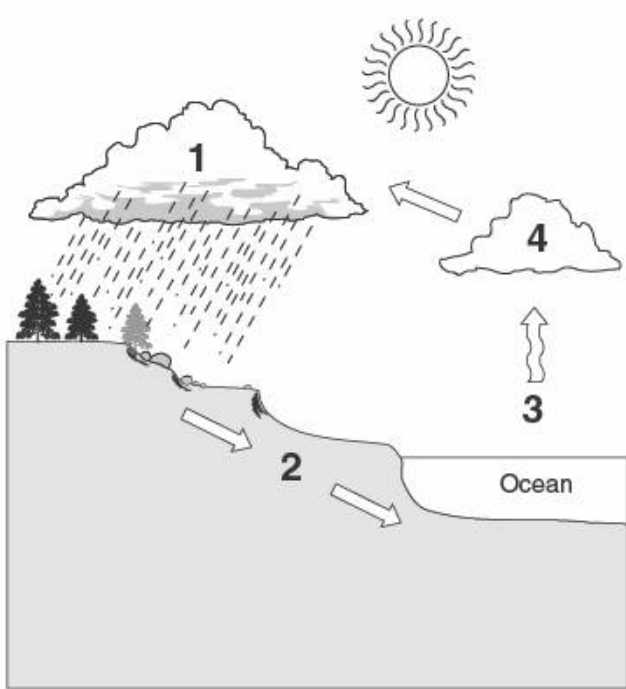
3. Which weather instrument tells the direction the wind is blowing?

- A. barometer
 - B. rain gauge
 - C. thermometer
 - D. weather vane
-

4. Which of the following weather conditions would make you put on a heavy, warm coat and gloves?



5.



The picture shows the water cycle. At which point in the cycle does most evaporation occur?

- A. 1
- B. 2
- C. 3
- D. 4

*Permission has been granted for reproduction by the Virginia Department of Education
© Virginia Department of Education*

6. Which is the LARGEST object in the solar system?

- A. Earth
- B. Mars
- C. the Sun
- D. the Moon

7.

If the North Pole tilts towards the Sun in June, where would summer be in the world?

- A. the eastern half of the Earth
 - B. the western half of the Earth
 - C. the northern half of the Earth
 - D. the southern half of the Earth
-

8. Which planet is the fourth from the Sun?

- A. Saturn
 - B. Mars
 - C. Uranus
 - D. Jupiter
-

9. How do dewdrops form on a leaf?

- A. They are formed from melted frost.
 - B. They are formed from water vapor in the air.
 - C. They fall as melted snow and are caught on the leaf.
 - D. They fall like a light rain and are caught on the leaf.
-

10. Planets revolve around

- A. Earth.
- B. the Sun.
- C. the Moon.
- D. Mars.

Answer Key

1. B) Mars

2. D) sleet

3. D) weather vane



4. B)

5. C) 3

6. C) the Sun

7. C) the northern half of the Earth

8. B) Mars

9. B) They are formed from water vapor in the air.

10. B) the Sun.